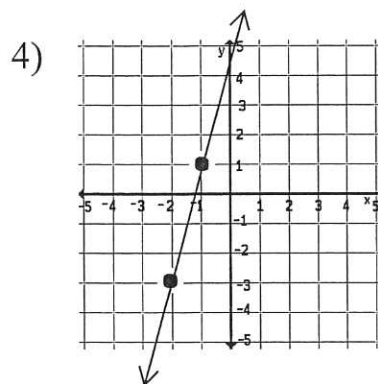
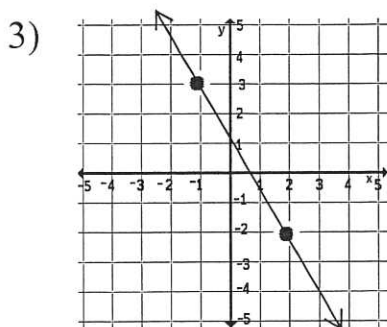
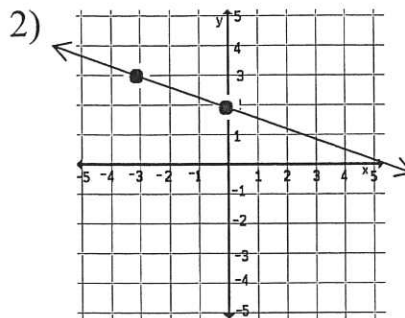
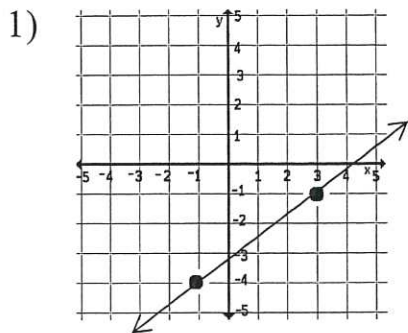


# Slope Assignment!

NAME: \_\_\_\_\_

Find the slope of the following lines.



Find the slope of the line that passes through the given pair of points.

5)  $(1, 5)$  &  $(3, 12)$

6)  $(2, -4)$  &  $(12, 3)$

7)  $(-2, 1)$  &  $(-5, 5)$

8)  $(-1, 7)$  &  $(-6, 1)$

9)  $(-3, 4)$  &  $(13, 8)$

10)  $(3, -10)$  &  $(4, -21)$